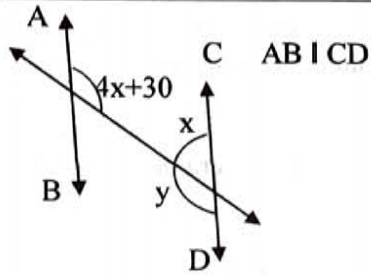


EJERCICIOS

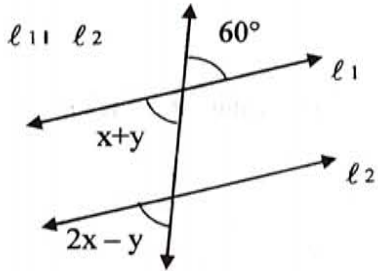
1)



$\sphericalangle x =$

$\sphericalangle y =$

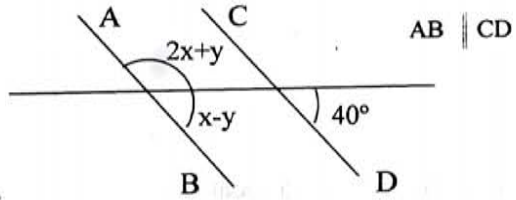
2)



$x =$

$y =$

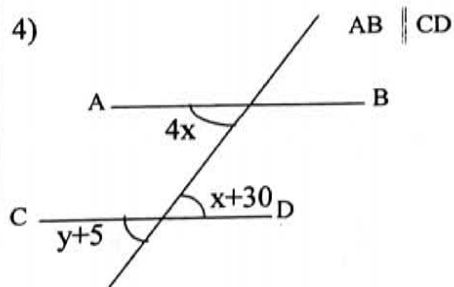
3)



$x =$

$y =$

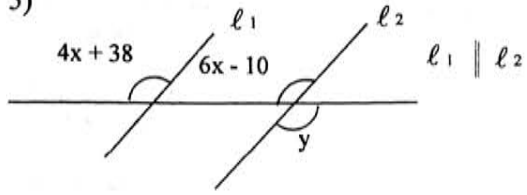
4)



$x =$

$y =$

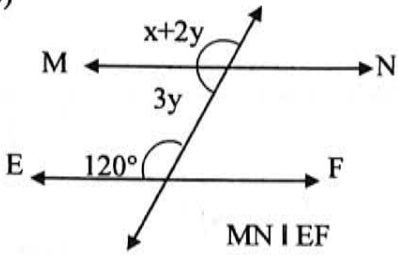
5)



$x =$

$\sphericalangle y =$

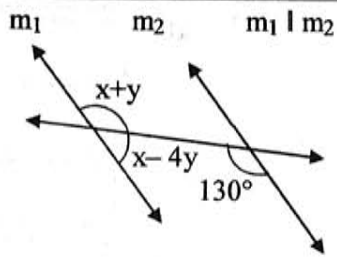
6)



$x =$

$y =$

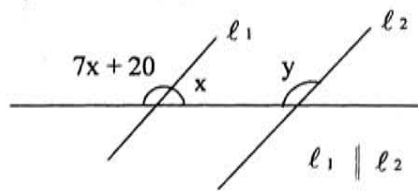
7)



$x =$

$y =$

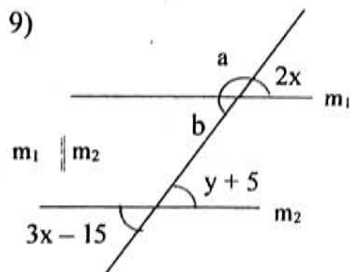
8)



$\sphericalangle x =$

$\sphericalangle y =$

9)



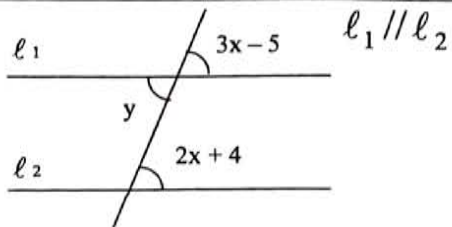
$\sphericalangle a =$

$\sphericalangle b =$

$x =$

$y =$

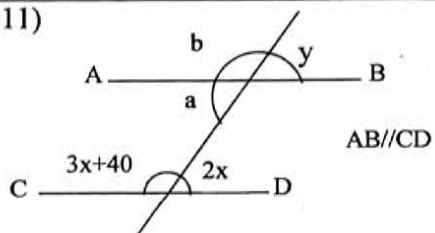
10)



$x =$

$\sphericalangle y =$

11)



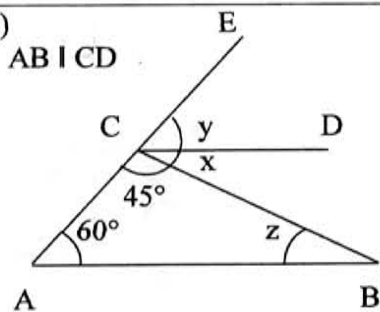
$x =$

$\sphericalangle y =$

$\sphericalangle a =$

$\sphericalangle b =$

12)

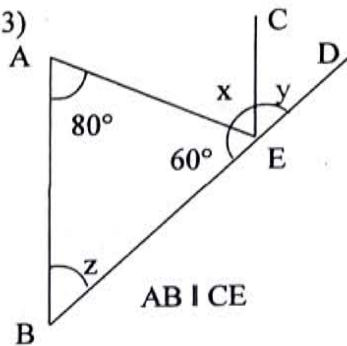


$\sphericalangle x =$

$\sphericalangle y =$

$\sphericalangle z =$

13)



$\sphericalangle x =$

$\sphericalangle y =$

$\sphericalangle z =$